

Addition – to 5

How many are there altogether?



2 and 2 makes 4 altogether.

1   How many are there altogether?



and makes altogether.



and makes altogether.



and makes altogether.



and makes altogether.

Addition – to 5

1  Draw more. How many are there altogether?

3 bananas

Draw 2 more


bananas altogether



2 balloons

Draw 2 more

balloons altogether



1 face

Draw 3 more

faces altogether





0 flowers

Draw 3 more

flowers altogether

Addition – to 5

- 1   Draw pictures or use counters to solve. Write how many are altogether.

3 great girls.

1 brave boy.

How many children are there altogether?

2 black pups.

2 brown pups.

1 spotty pup.

How many pups are there altogether?