


Addition to 20 – word problems

1 Draw pictures and then write the fact.


a Tom Thumb has 12 apples. Lucy Locket has 7 apples.



How many do they have altogether?

$$\square + \square = \square$$


b Pink Penelope has 15 stars. Blue Bertie has 4 stars.



How many stars do they have altogether?

$$\square + \square = \square$$

c Hungry Harry has eaten 7 donuts. Little Lila has eaten 9 donuts.



How many donuts have they eaten altogether?

$$\square + \square = \square$$